

Name \_\_\_\_\_

Class \_\_\_\_\_ Seat Number \_\_\_\_\_









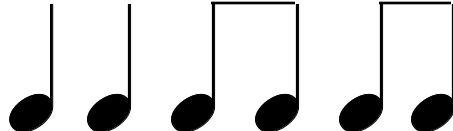

### 5th Grade Music — 1st Quarter Grades

**Participation in Singing — The participation grade will have the same weight as a regular assignment.**

Each 5th grade student received 100 participation points at the beginning of the quarter. Mrs. Lithgow conducts an unannounced participation check once during each class period. Students who are not singing during the check lose 10 points. Points remaining at the end of the quarter are a part of the final quarter grade.

**Demonstration of Skills — Performance Test — This test will be weighted. It will be worth double the amount of points as a regular assignment.**

Students will choose five of the following rhythm patterns to perform by clapping.


1. 
2. 
3. 
4. 
5. 
6. 
7. 
8. 
9. 
10. 

**Demonstration of Knowledge and Understanding — Written Test — The test will be weighted. It will be worth double the amount of points as a regular assignment.**

Students will choose one of the following methods to demonstrate understanding of the relative value of notes:

- **Option 1**-Draw the note value pyramid, label the notes, and use sentences to explain what the pyramid means.
- **Option 2**-Complete a written test. The test will have 12 fill-in-the-blank questions.
- **Option 3 for students who have difficulty taking a written exam**-Complete an oral examination using flashcards. Selected students will be asked to name five notes and put them in order from longest to shortest.

| <b>Let's Practice Option 1—Note Values Pyramid</b> |                       |
|--|-----------------------|
| <b>Draw the Notes</b>                              | <b>Name the Notes</b> |
|  |                       |
|  |                       |
|  |                       |
|  |                       |
|  |                       |
| <b>Explanation:</b>                                |                       |
|  |                       |

| <b>Option 2-Sample Questions</b>   |
|--|
| 1. What note is twice as long as a half note?  |
| 2. What note is twice as long as an 8th note?  |
| 3. What note is twice as long as a 16th note?  |
| 4. What note is twice as long as a quarter note?                                     |
| 5. What note is half as long as a quarter note?                                      |
| 6. What note is half as long as an 8th note?   |
| 7. What note is half as long as a whole note?  |
| 8. What note is half as long as a half note?   |
| 9. What are the names of these notes?  |
|  |